

# NEW AL WUROOD INTERNATIONAL SCHOOL, JEDDAH

Affiliated to CBSE – New Delhi.



## Work sheet-1 FIRST TERM EXAM, 2019-20 Subject: Social Science GRADE: VII

1. Unscramble the words and fill in the blanks.

i) The empire was divided into \_\_\_\_\_ QITA

ii) The sultan appointed his bandagans as \_\_\_\_\_ QATADRAIS

iii) The bandagans were the special \_\_\_\_\_ of the sultan. LEVSAS

iv) The sultan asked the Iqtadars to maintain \_\_\_\_\_ OLDSEIRS

2. Which do you think is more important to strengthen a kingdom-agriculture or army?

Give reasons for your answer.

---

---

---

---

---

---

---

3. Look at the picture of the coins carefully and answer the questions.



A. Write any two bits of information that this source gives us about the Delhi Sultanate.

---

---

B. What information does it NOT give us about it ?

---

4. Write two differences between intrusive igneous rocks and Extrusive igneous rocks.

---

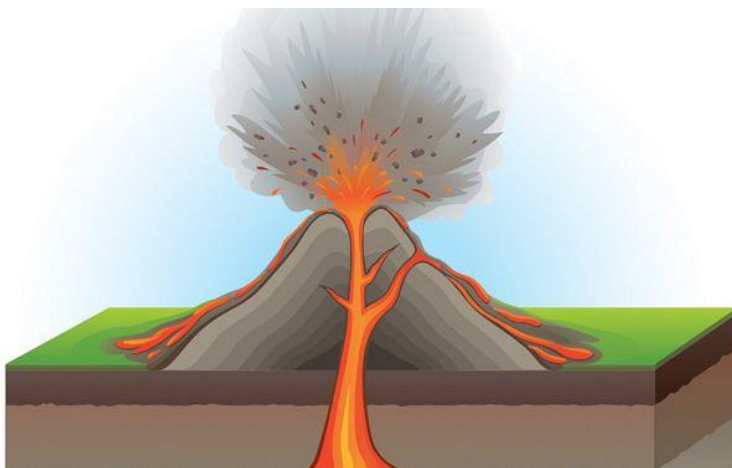
---

---

5. Answer the following questions about the igneous rocks

A. Label the volcano, the magma, the lava and the igneous rock in the image.

B. Explain the term igneous rocks and their formation.



---

---

---

---

6. When do you think regional party becomes more powerful and national parties?

---

---

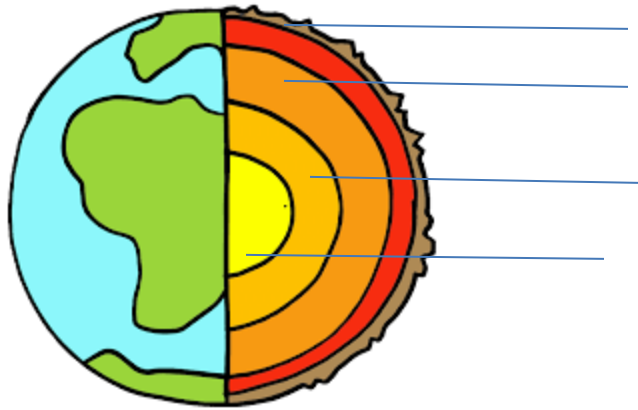
---

---

7. Draw a simple diagram to explain the rock cycle.



8. Label the different layers of the Earth and explain it.




---



---



---



---



---

9. The rock cycle is never – ending it has no beginning and no end. Explain

---



---



---



---



---

10. Classify the following words under two headings in 2 columns- democratic government and authoritarian government .

*Collective decisions, one – person rule, elections, dictator, elected representative, unlimited power, military rule, vote*

Authoritarian government	Democratic government

--	--

11. Arcadia had a democratic government. Write 3 democratic features that would be practice by the government of Arcadia .

---

---

---

12. Where can a coalition government be formed and why?

---

---


---

---

---

---

13. Explain the structure of the atmosphere. Support your explanation with a simple diagram.



---

---

---

---

---

14. Explain why we feel sticky and uncomfortable on humid days.

---

---

---

---

---

15. Should history be divided into periods? Give reasons to support your answer.

---

---

---

---