



B.E.S.T. Group of Schools, Saudi Arabia
Revision Worksheet 2
(Blocks- 6 &7)

Class: 4

Subject: Social Science

Evaluation-1 June 2018

I. Fill in the Blanks.

1. _____ is a Greek philosopher was the first to draw a map of the known world.
2. A map is drawing on a _____ surface.
3. A legend is a _____ of all the symbols and colours used in a map.
4. _____ are things we are free to do.
5. We must respect our national _____





II. State true or false. If false correct it.

1. Every child must to earn to live.

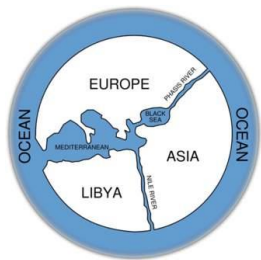
2. The title of the map tells us about the place shown in the map.

3. Most maps do not use colours to show features on the map.

III. Match the following:

- a.  a. Petrol pump
- b.  b. Post office
- c.  c. Bus stop
- d.  d. Parking

IV. Identify the picture and comment on it.



V. Answer the following:

1. Give one reason why we should have rights?

2. Name the elements of a map.

3. Define: a) Scale: -----

b) Legend:-----

c) Cartographer: -----

4. Write about two fundamentals rights.

5. What would happen, if we did not have any rights?

6. What would have happened, if we only had rights but no duties?

7. What must children have to lead a happy and healthy life?

8. Tina and Sheena are 10 year old girls who work in a factory. Should they be allowed to do this? If not what should they be doing instead?

9. What is the importance of the elements in completing a map?

10. Why do we need a common scheme of symbols and colours?

11. Elements are important in a map. Justify your answer.

12. Describe the rights of a child.

13. Rights and duties go together. We cannot have one without the other. Explain



VI. Draw a sketch map of your school using the elements of a map.