

NEW AL WUROOD INTERNATIONAL SCHOOL, JEDDAH, K.S.A

Affiliated to CBSE – New Delhi, Affiliation No. 5730008



WORKSHEET 1

GRADE: 1 – EVALUATION 3 -2019-2020


SUBJECT: MATHEMATICS

I. Fill in the blanks

A. There are _____ days in a week.

B. $3+1+4=$ _____

C. $10-10=$ _____

D.  = _____

E. 9 tens and 2 ones = _____

II. Write the missing numbers

A.

22			25		27		
----	--	--	----	--	----	--	--

B.

35		37					42
----	--	----	--	--	--	--	----

C.

10			7				3
----	--	--	---	--	--	--	---

D.

56			53	52			
----	--	--	----	----	--	--	--

III. Identify the skip count

A. 2, 4, 6, 10, 12, 16, 18, 19, 20


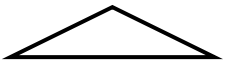

Skip count by _____

IV. Write the number names

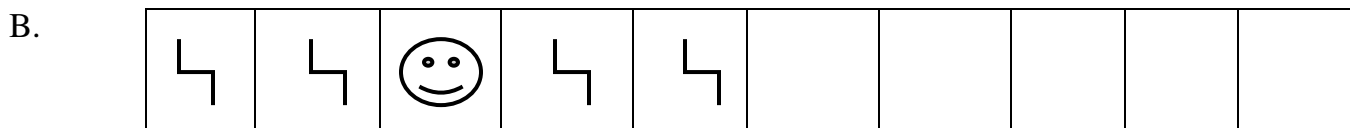

A. 17- _____

B. 90- _____

V. Complete the table

	Shape	Number of sides	Number of corners
A.			
B.			
C.			

VI. Complete the pattern



VI. Write the days of the week

1. _____
2. _____
3. _____
4. _____
5. _____
6. _____
7. _____

All the best!
