



NEW AL WUROOD INTERNATIONAL SCHOOL JEDDAH
B.E.S.T. Group of Schools, K.S.A.

Affiliated to CBSE – New Delhi, Affiliation No: 5730008

EVALUATION – 3 MARCH (2022-23)

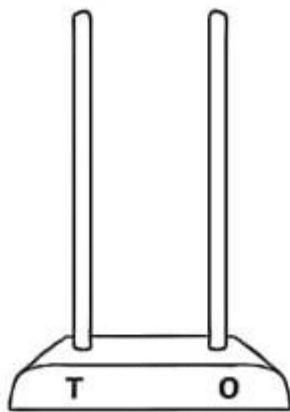
REVISION WORKSHEET – 1

GRADE – 1

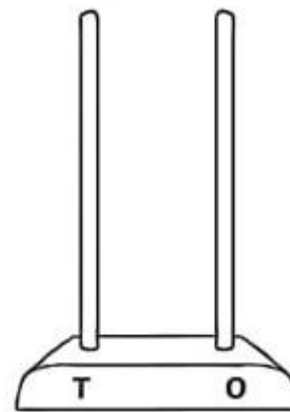
SUBJECT: MATH

Q1. Draw the beads on the abacus to show the numbers.

A.57



B.87



Q2. Draw the hour hand to show the given time.

A. 7 o' clock



B. 9 o'clock



C. 12 o'clock



Q3. Fill in the blanks:

A. $37 + 50 = \underline{\hspace{2cm}}$








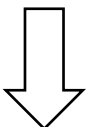
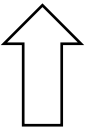
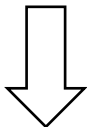
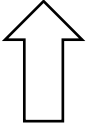
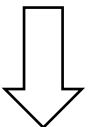
B. $61 + 23 = \underline{\hspace{2cm}}$

C. If today is Monday, then tomorrow is _____.

D. There are _____ months in a year.

E. The month that comes after July is _____.

Q4. Complete the pattern:

								
								
5	10	15	20	25	30			

Q5. Fill in the missing month:

A. _____, February, _____.

B. _____, Sunday, _____.

Q6. Add the numbers:

A. $51 + 25 = \underline{\hspace{2cm}}$ T O 5 1 + 2 5 <hr/> <hr/>	B. $63 + 24 = \underline{\hspace{2cm}}$ T O 6 3 + 2 4 <hr/> <hr/>
--	--

Q7. Subtract the numbers:

<p>A. $74 - 21 = \underline{\hspace{2cm}}$</p> <p>T O</p> <p>7 4</p> <p>- 2 1</p> <hr/> <hr/>	<p>B. $77 - 35 = \underline{\hspace{2cm}}$</p> <p>T O</p> <p>7 7</p> <p>- 3 5</p> <hr/> <hr/>
---	---

Q8. Extend the pattern:

B	BB	BBB		
---	----	-----	--	--

Q9. There are 45 apples and 15 bananas. How many fruits are there altogether?

--