



**NEW AL WUROOD INTERNATIONAL SCHOOL, JEDDAH, K.S.A**

Affiliated to CBSE – New Delhi, No:5730019

**EVALUATION-3(2018-19)**

**Subject: MATHEMATICS**

**Revision Worksheet – 2**

**Bl – 22 Flat and solid Shapes**


Name: \_\_\_\_\_

Class: 1      Sec: \_\_\_\_\_

**I. Fill in the blanks.**

1.  $5 + 3 =$  \_\_\_\_\_


2.  $15 - 5 =$  \_\_\_\_\_

3.  = \_\_\_\_\_

4.  $3 + 4 + 4 =$  \_\_\_\_\_

5.  $20 - 10 =$  \_\_\_\_\_

**II. Match the following.**


Altogether	
5	sort thing
	add
data	subtract

**SECTION-B**

**I. Do as directed**

**3(2mark)**

1. Write the missing days of the week.



2. Write the missing number.



3. Use ☺ and ♥ to make a pattern like.


A	B	A	B	A	B	A	B

### SECTION C

I. Do as directed

3(3 mark)

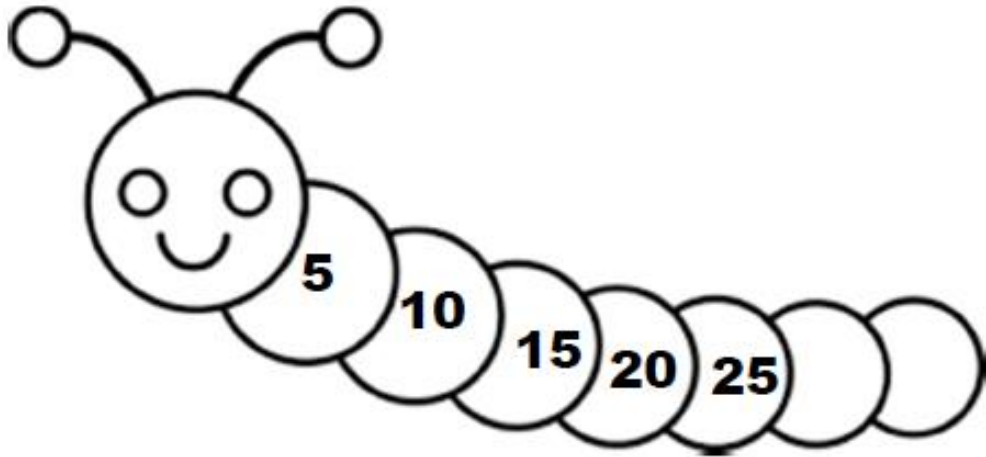
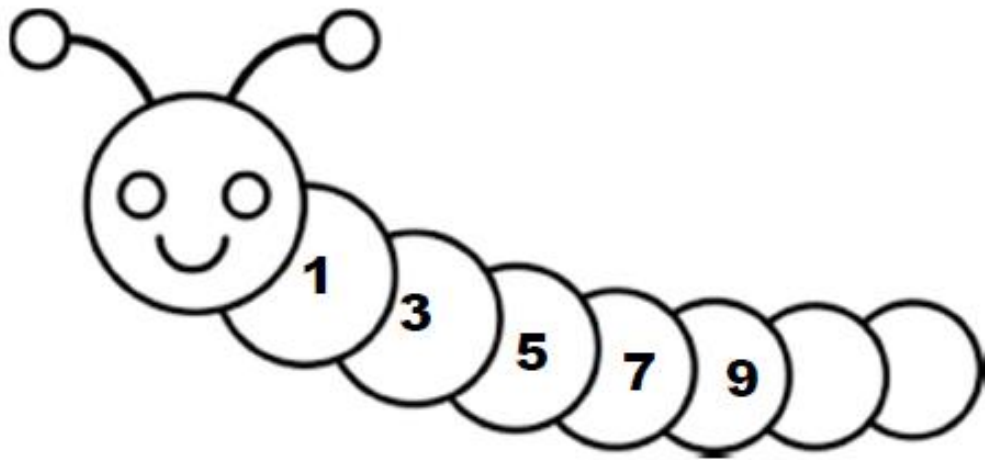
1. Color all the triangles with red, rectangles with blue and squares with yellow.



2. Put the activities in the order in which they are done.

a)	Dinner	
b)	Lunch	
c)	Breakfast	

3. Write the numbers to finish the pattern.



[www.alwu.com](http://www.alwu.com)