

NEW AL WUROOD INTERNATIONAL SCHOOL, JEDDAH, K.S.A

Affiliated to CBSE – New Delhi, Affiliation No. 5730008



WORKSHEET 2

GRADE: 1 – EVALUATION 3 -2019-2020

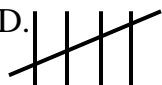
SUBJECT: MATHEMATICS

I. Fill in the blanks

A. There are _____ months in a year.

B. $2+0+8=$ _____

C. $20 - 0=$ _____

D.  _____

E. 5 tens and 8 ones = _____

II. Write the missing numbers

A.

42			45		47		
----	--	--	----	--	----	--	--

B.

65		67					72
----	--	----	--	--	--	--	----

C.

20			17				13
----	--	--	----	--	--	--	----

D.

86			83	82			
----	--	--	----	----	--	--	--

III. Identify the skip count

A. 5, 10, 15, 20, 25, 30, 35, 40




Skip count by _____

IV. Write the number names

A. 100- _____





B. 83- _____

V. Complete the table

	Shape	Number of sides	Number of corners
A.			
B.			
C.			

VI. Complete the pattern

A.

									
---	---	---	---	--	--	--	--	--	--

B.

10	20	30							
----	----	----	--	--	--	--	--	--	--

VI. Write the months of the year

- | | |
|----------|-----------|
| 1. _____ | 7. _____ |
| 2. _____ | 8. _____ |
| 3. _____ | 9. _____ |
| 4. _____ | 10. _____ |
| 5. _____ | 11. _____ |
| 6. _____ | 12. _____ |

----- All the best! -----